



UNICUS OLYMPIADS

Sample Paper (2020-21)

Class 3

Unicus Mathematics Olympiad



Section – Class* <small>*Syllabus covered</small>	Total Questions	Marks per Questions	Total Questions
Classic Section – Class 2	23	1	23
Classic Section – Class 1	7	1	7
Scholar Section – Class 2	7	2	14
Scholar Section – Class 1	3	2	6
Grand Total	40		50

1. Read the following statements carefully and choose the incorrect statement:

- a) The greatest three digit even number is 999.
- b) The face value of 4 in six thousand two hundred and four is four.
- c) $1000 + 1$ is the greatest four-digit odd number.
- d) Predecessor of the least three-digit number is 99.

Correct Answer: a

1 Mark

2. Choose the correct ascending order of the following numbers:

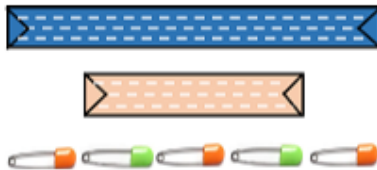
495, 945, 549, 594, 954, 459

- a) 954, 945, 594, 549, 495, 459
- b) 459, 495, 549, 945, 594, 954
- c) 459, 495, 549, 594, 945, 954
- d) 954, 945, 549, 594, 459, 495

Correct Answer: c

1 Mark

3. Look at the image given below and find the length of the blue ribbon if one safety pin = one cm:



- a) 3 cm
- b) 4 cm
- c) 5 cm
- d) 8 cm

Correct Answer: c

1 Mark

4. Manu bought a laptop bag for Rs. 225 and a sunglasses for Rs. 535. How much money did she spend in all?



- a) Rs. 310
- b) Rs. 660
- c) Rs. 760
- d) Rs. 820

Correct Answer: c

1 Mark






8. On first day of a month Ria's mother purchased 95 kg 750 g of flour. Out of which, 59 kg 500 g of flour was consumed during the month. How much flour was left?

- a) 46.250 kg
 c) 4.625 kg
 b) 36.250 kg
 d) 3.625 kg

Correct Answer: b

1 Mark

9. 260 children visited a zoo. They each voted for their favourite animal. (Problem based on figures)

Favourite animal	 Cheetah	 Lion	 Tiger	 Leopard	 Elephant
Number of children	89	23	44	38	?


How many children liked elephant?

- a) 94
 c) 66
 b) 82
 d) 54

Correct Answer: c

2 Marks

10. Pranav records the outside temperature each morning for a week. On Tuesday, he recorded the temperature as shown below in the thermometer. On Wednesday, the temperature was 7 degrees cooler. What was the temperature on Wednesday?



- a) 22°C
 c) 17°C
 b) 8°C
 d) None of the above

Correct Answer: b

2 Marks