



# UNICUS OLYMPIADS

## Sample Paper (2020-21)

**Class 1**

**Unicus Mathematics Olympiad**



<b>Section – Class*</b> <small>*Syllabus covered</small>	<b>Total Questions</b>	<b>Marks per Questions</b>	<b>Total Questions</b>
Classic Section – Class Prep/Kg	20	1	20
Scholar Section – Class Prep/Kg	5	2	10
<b>Grand Total</b>	<b>25</b>		<b>30</b>

1. Count the oranges:



a) 4

b) 6


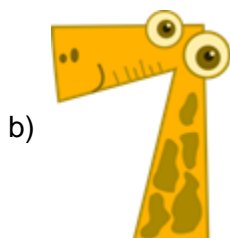

c) 8

**Correct Answer: b**

*1 Mark*

---

2. What comes before 6?



**Correct Answer: c**

*1 Mark*

---

3. What is the colour of the car?



a) Red

b) Yellow

c) Green

**Correct Answer: a**

*1 Mark*

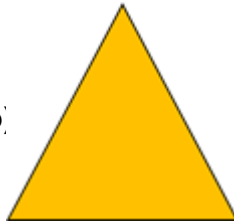
4. What is the shape of the given image?



a)



b)



c)



**Correct Answer: c**

*1 Mark*

---

5. Count the ants:



a)



b)



c)



**Correct Answer: a**

*1 Mark*

---

6. What is the colour of grapes?

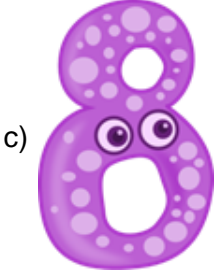
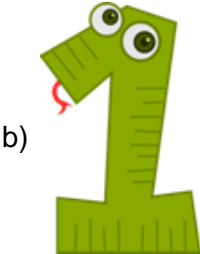


**Correct Answer: b**

*1 Mark*

---

7. What comes after 7?



**Correct Answer: c**

*1 Mark*

---

8. Count the apples:



a) 4

b) 6

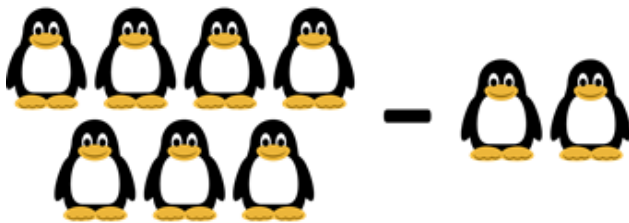
c) 3

**Correct Answer: a**

*1 Mark*

---

9. Find the difference:



a) 5

b) 8

c) 2

**Correct Answer: a**

*1 Mark*

---

10. What is the sum of the given coins?



a) 10

b) 12

c) 14

**Correct Answer: b**

*1 Mark*

11. Count the number of triangles in the given image:



a) 3

b) 2

c) 1

**Correct Answer: a**

1 Mark

---

12. Complete the given series:



a) 1, 3, 5

b) 1, 2, 3

c) 4, 5, 6

**Correct Answer: c**

1 Mark

---

13. Which basket is empty?



a) Left


b) Centre

c) Right

**Correct Answer: c**

1 Mark

14. Fill in the blank:



a) 8

b) 4

c) 7

**Correct Answer: c**

*1 Mark*

---

15. Which sign is used between them?



a) 

b) 


c) 

**Correct Answer: a**

*1 Mark*

---

16. Which is lighter?



**Correct Answer: a**

*1 Mark*

---

17. What is the time in the clock shown?



a) 12:00

b) 3:00

c) 5:00



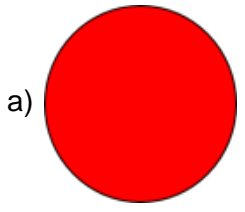
**Correct Answer: b**

*1 Mark*

---



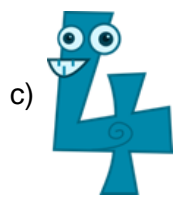
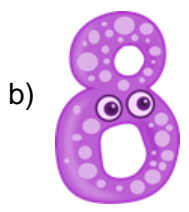
18. What is its shape?



**Correct Answer: a**

1 Mark

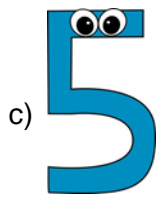
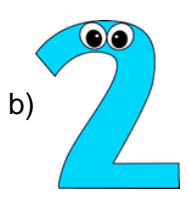

19. What is the sum of the given coins?



**Correct Answer: b**

1 Mark

20. Fill in the blank:



**Correct Answer: c**

1 Mark

21. Find its number name:



a) Two

b) Ten

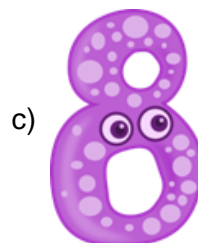
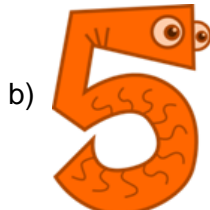
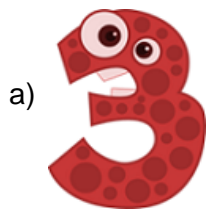

c) Eight

**Correct Answer: b**

*2 Marks*

---

22. What is the time?

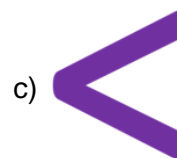


**Correct Answer: b**

*2 Marks*

---

23. Which sign should come?



**Correct Answer: c**

*2 Marks*

24. Find its number name:



a) Five

b) Three



c) Four

**Correct Answer: a**

*2 Marks*

---

25. Which fruit is heavy?



**Correct Answer: a**

*2 Marks*

---