



# UNICUS OLYMPIADS

## Sample Paper (2020-21)

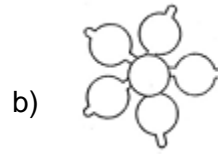

**Class 2**

**Unicus Critical Thinking Olympiad**



<b>Section – Class*</b> <small>*Syllabus covered</small>	<b>Total Questions</b>	<b>Marks per Questions</b>	<b>Total Questions</b>
Classic Section – Class 1	30	1	30
Scholar Section – Class 1	5	2	10
<b>Grand Total</b>	<b>35</b>		<b>40</b>

1. Find the odd one out from the given options:



**Correct Answer: c**

*1 Mark*

---

2. The fifth letter from the right end is \_\_\_\_\_.  
T U D G H I J K P

- a) I  
c) D

- b) H  
d) G

**Correct Answer: b**

*1 Mark*

---

3. It was 12 noon and Shweta asked mom for some wafers and biscuits. Mother denied and asked her to have chapattis and rice for lunch. When do you think she should have wafers and biscuits?

- a) Lunch  
c) Breakfast

- b) Snack time  
d) Dinner

**Correct Answer: b**

*1 Mark*

---

4. There were 7 persons running in a race including you. If you are at the 3rd position, how many of them are behind you?

- a) 2  
c) 4

- b) 3  
d) 5

**Correct Answer: c**

*1 Mark*

5. Given is the picture of a car. Name the part of the car which has no sides:



- a) Seat
- c) Seatbelt

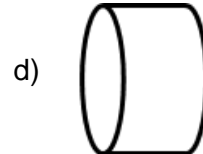
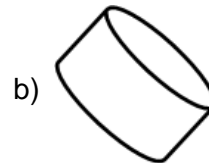
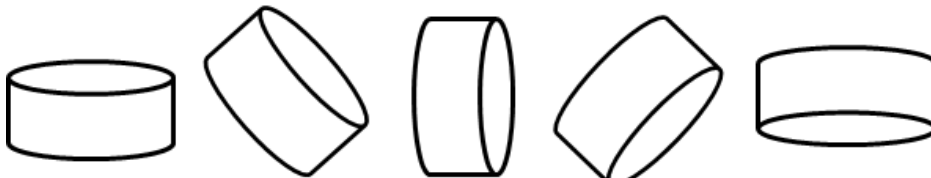
- b) Window
- d) Wheel

**Correct Answer: d**

*1 Mark*

---

6. Complete the following pattern:



**Correct Answer: a**

*1 Mark*

---

7. Which among the following options will you select to complete the given sequence?



**Correct Answer: c**

*1 Mark*

8. Mother called Arun for lunch and asked him to wash his hands. She told him to pick up the waste and throw in the container. What is the container called?

- a) Drum  
c) Bucket
- b) Utensil  
d) Dustbin

**Correct Answer: d**

*1 Mark*

---

9. Which among the following matches with the given description?

- 1) I have 3 sides.  
2) My 3 sides may or may not be the same.  
3) I have one base.


- a) Square  
c) Rectangle
- b) Triangle  
d) Circle

**Correct Answer: b**

*2 Marks*

---

10. Count the number of circles



- a) 8  
c) 12
- b) 10  
d) 9

**Correct Answer: d**

*2 Marks*

---